



JEE-MAIN – JUNE, 2022

(Held On Tuesday 29th June, 2022)

TIME : 3 : 00 PM to 6 : 00 PM

Chemistry

Test Pattern : JEE-MAIN

Maximum Marks : 120

Topic Covered: FULL SYLLABUS

Important instruction:

1. Use Blue / Black Ball point pen only.
2. There are three sections of equal weightage in the question paper **Physics**, **Chemistry** and **Mathematics** having 30 questions in each subject. Each paper have 2 sections A and B.
3. You are awarded +4 marks for each correct answer and –1 marks for each incorrect answer.
4. Use of calculator and other electronic devices is not allowed during the exam.
5. No extra sheets will be provided for any kind of work.

Name of the Candidate (in Capitals) _____

Father's Name (in Capitals) _____

Form Number : in figures _____

: in words _____

Centre of Examination (in Capitals): _____

Candidate's Signature: _____

Invigilator's Signature : _____

Rough Space

YOUR TARGET IS TO SECURE GOOD RANK IN JEE-MAIN

Corporate Office : **ALLEN** Digital Pvt. Ltd., "One Biz Square", A-12 (a), Road No. 1, Indraprastha Industrial Area,
Kota (Rajasthan) INDIA-324005

☎ +91-9513736499 | ☎ +91-7849901001 | ✉ wecare@allendigital.in | 🌐 www.allendigital.in

FINAL JEE-MAIN EXAMINATION – JUNE, 2022**(Held On Wednesday 29th June, 2022)****TIME : 3 : 00 PM to 06 : 00 PM****CHEMISTRY****TEST PAPER WITH SOLUTION****SECTION-A**

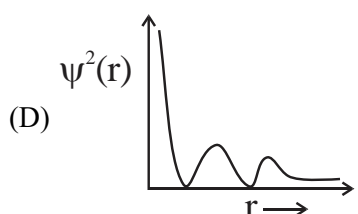
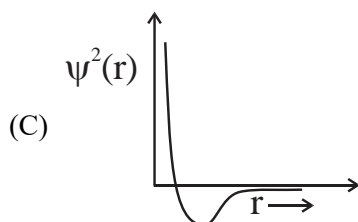
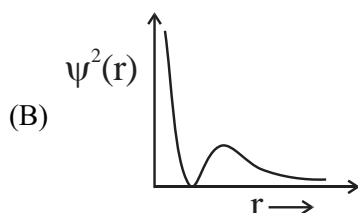
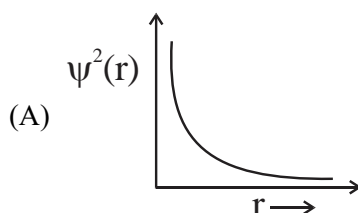
1. Using the rules for significant figures, the correct answer for the expression $\frac{0.02858 \times 0.112}{0.5702}$ will be:

(A) 0.005613 (B) 0.00561
(C) 0.0056 (D) 0.006

Official Ans. by NTA (B)**Allen Ans. (B)**

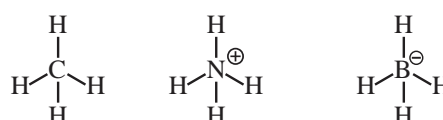
- Sol.** Reported answer should not be more precise than least precise term in calculations, so there should be three significant figures in reported answer.

2. Which of the following is the correct plot for the probability density $\psi^2(r)$ as a function of distance 'r' of the electron from the nucleus for 2s orbital?

**Official Ans. by NTA (B)****Allen Ans. (B)**

- Sol.** For 2s, number of radial nodes = $2 - 0 - 1 = 1$ and value of ψ^2 is always positive.

3. Consider the species CH_4 , NH_4^+ and BH_4^- . Choose the correct option with respect to the these species:
(A) They are isoelectronic and only two have tetrahedral structures
(B) They are isoelectronic and all have tetrahedral structures
(C) Only two are isoelectronic and all have tetrahedral structures
(D) Only two are isoelectronic and only two have tetrahedral structures

Official Ans. by NTA (B)**Allen Ans. (B)****Sol.**

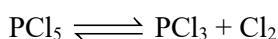
All are tetrahedral and each have 10 electrons.

4. 4.0 moles of argon and 5.0 moles of PCl_5 are introduced into an evacuated flask of 100 litre capacity at 610 K. The system is allowed to equilibrate. At equilibrium, the total pressure of mixture was found to be 6.0 atm. The K_p for the reaction is [Given : $R = 0.082 \text{ L atm K}^{-1} \text{ mol}^{-1}$]
(A) 2.25 (B) 6.24
(C) 12.13 (D) 15.24

Official Ans. by NTA (A)**Allen Ans. (A)****Sol.** $\text{PCl}_5 = 5 \text{ mole}$ $\text{Ar} = 4 \text{ mole}$

$$P_{\text{Total}} = \frac{9 \times 0.82 \times 610}{100} = 4.5 \text{ atm}$$

$$P_{\text{PCl}_5} = \frac{5 \times 4.5}{9} = 2.5 ; P_{\text{Ar}} = \frac{4 \times 4.5}{9} = 2$$



$$2.5 - P \quad P \quad P$$

$$P_{\text{total}} = 2.5 - P + P + P + P_{\text{Ar}} = 6$$

$$P = 1.5$$

$$K_p = \frac{1.5 \times 1.5}{1} = 2.25$$

5. A 42.12% (w/v) solution of NaCl causes precipitation of a certain sol in 10 hours. The coagulating value of NaCl for the sol is

[Given : Molar mass : Na = 23.0 g mol⁻¹; Cl = 35.5 g mol⁻¹]

- (A) 36 mmol L⁻¹
 (B) 36 mol L⁻¹
 (C) 1440 mol L⁻¹
 (D) 1440 mmol L⁻¹

Official Ans. by NTA (D)

Allen Ans. (Bonus)

Sol. Data insufficient.

6. Given below are two statements. One is labelled as Assertion A and the other is labelled as Reason R.

Assertion A : The first ionization enthalpy for oxygen is lower than that of nitrogen.

Reason R : The four electrons in 2p orbitals of oxygen experience more electron-electron repulsion.

In the light of the above statements, choose the correct answer from the options given below.

- (A) Both A and R are correct and R is the correct explanation of A.
 (B) Both A and R are correct but R is NOT the correct explanation of A.
 (C) A is correct but R is not correct.
 (D) A is not correct but R is correct

Official Ans. by NTA (A)

Allen Ans. (A)

Sol. Ionisation energy = N > O.

In oxygen atom, 2 of the 4 2p electrons must occupy the same 2p orbital resulting in an increased electron electron-repulsion.

7. Match List I with List II.

List I Ore	List II Composition
A. Siderite	I. Fe CO ₃
B. Malachite	II. CuCO ₃ .Cu(OH) ₂
C. Sphalerite	III. ZnS
D. Calamine	IV. ZnCO ₃

Choose the correct answer from the options given below:

- (A) A-I, B-II, C-III, D-IV
 (B) A-III, B-IV, C-II, D-I
 (C) A-IV, B-III, C-I, D-II
 (D) A-I, B-II, C-IV, D-III

Official Ans. by NTA (A)

Allen Ans. (A)

Sol. Siderite – FeCO₃

Malachite – CuCO₃.Cu(OH)₂

Calamine – ZnCO₃

Sphalerite – ZnS

8. Given below are two statements .

Statement I : In CuSO₄.5H₂O, Cu–O bonds are present.

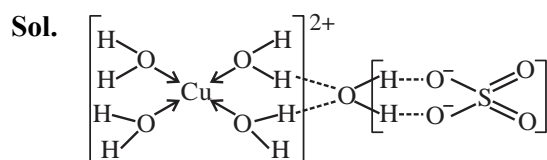
Statement II : In CuSO₄.5H₂O, ligands coordinating with Cu(II) ion are O-and S-based ligands.

In the light of the above statements, choose the correct answer from the options given below

- (A) Both Statement I and Statement II are correct
 (B) Both Statement I and Statement II are incorrect
 (C) Statement I is correct but Statement II is incorrect
 (D) Statement I is incorrect but Statement II is correct

Official Ans. by NTA (C)

Allen Ans. (C)



9. Amongst baking soda, caustic soda and washing soda carbonate anion is present in :

(A) washing soda only.
 (B) washing soda and caustic soda only.
 (C) washing soda and baking soda only.
 (D) baking soda, caustic soda and washing soda.

Official Ans. by NTA (A)

Allen Ans. (A)

Sol. Baking soda $\rightarrow \text{NaHCO}_3$

Washing soda $\rightarrow \text{Na}_2\text{CO}_3 \cdot 10\text{H}_2\text{O}$

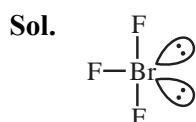
Caustic soda $\rightarrow \text{NaOH}$

10. Number of lone pair (s) of electrons on central atom and the shape of BrF_3 molecule respectively, are :

(A) 0, triangular planar.
 (B) 1, pyramidal.
 (C) 2, bent T-shape.
 (D) 1, bent T-shape

Official Ans. by NTA (C)

Allen Ans. (C)



Steric no. = 5 (sp^3d), lone pair = 2

Bent T shape.

11. Aqueous solution of which of the following boron compounds will be strongly basic in nature?

(A) NaBH_4 (B) LiBH_4
 (C) B_2H_6 (D) $\text{Na}_2\text{B}_4\text{O}_7$

Official Ans. by NTA (D)

Allen Ans. (D)

Sol. $\text{Na}_2\text{B}_4\text{O}_7$ gives H_3BO_3 and NaOH (strong base) in water.

12. Sulphur dioxide is one of the components of polluted air. SO_2 is also a major contributor to acid rain. The correct and complete reaction to represent acid rain caused by SO_2 is :

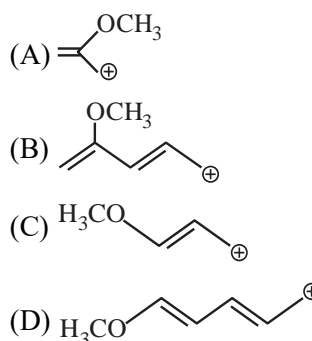
(A) $2\text{SO}_2 + \text{O}_2 \rightarrow 2\text{SO}_3$
 (B) $\text{SO}_2 + \text{O}_3 \rightarrow \text{SO}_3 + \text{O}_2$
 (C) $\text{SO}_2 + \text{H}_2\text{O}_2 \rightarrow \text{H}_2\text{SO}_4$
 (D) $2\text{SO}_2 + \text{O}_2 + 2\text{H}_2\text{O} \rightarrow 2\text{H}_2\text{SO}_4$

Official Ans. by NTA (D)

Allen Ans. (D)

Sol. $2\text{SO}_2 + \text{O}_2 + 2\text{H}_2\text{O} \rightarrow 2\text{H}_2\text{SO}_4$ (Acid rain)

13. Which of the following carbocations is most stable :




Official Ans. by NTA (D)

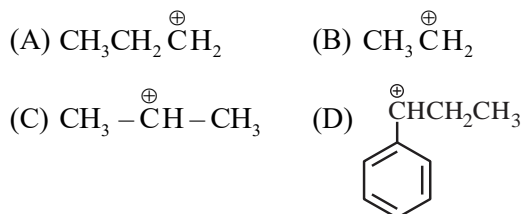
Allen Ans. (D)



Is most stable carbocation

14.  + $\text{CH}_3\text{CH}_2\text{CH}_2\text{Cl} \xrightarrow{\text{Anhydrous, AlCl}_3}$ 'A'
Major Product

The stable carbocation formed in the above reaction is :

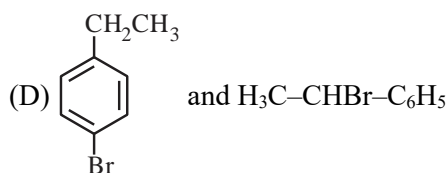
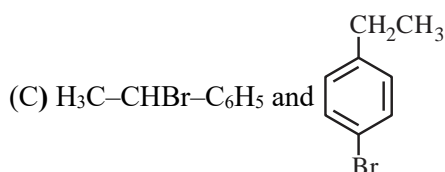
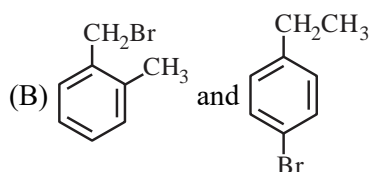
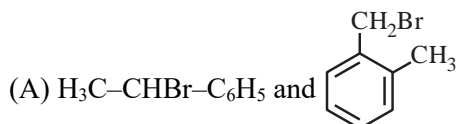


Official Ans. by NTA (C)

Allen Ans. (C)

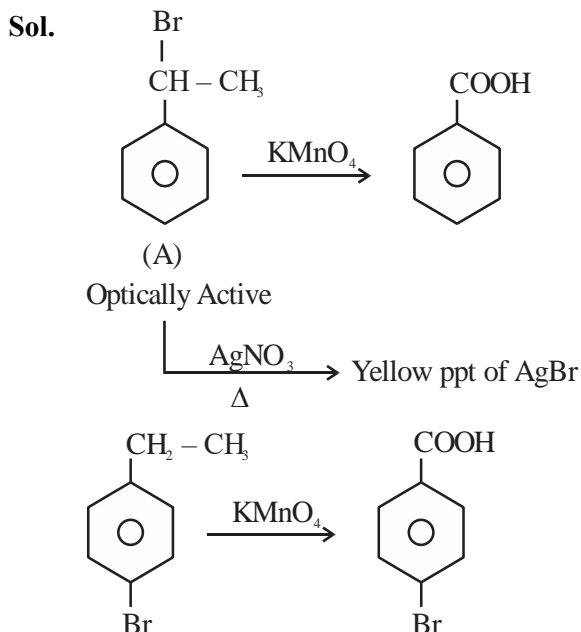
Sol. $\text{CH}_3-\text{CH}^+-\text{CH}_3$ is formed in the above reaction

15. Two isomers (A) and (B) with Molar mass 184 g/mol and elemental composition C, 52.2%; H, 4.9% and Br 42.9% gave benzoic acid and p-bromobenzoic acid, respectively on oxidation with KMnO_4 . Isomer 'A' is optically active and gives a pale yellow precipitate when warmed with alcoholic AgNO_3 . Isomer 'A' and 'B' are, respectively :



Official Ans. by NTA (C)

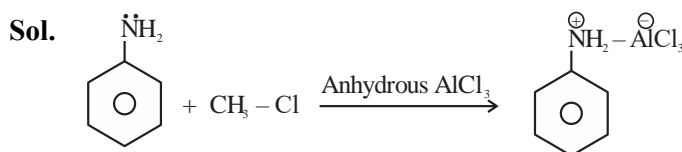
Allen Ans. (C)



16. In Friedel-Crafts alkylation of aniline, one gets :
- (A) alkylated product with ortho and para substitution.
- (B) secondary amine after acidic treatment.
- (C) an amide product.
- (D) positively charged nitrogen at benzene ring.

Official Ans. by NTA (D)

Allen Ans. (D)

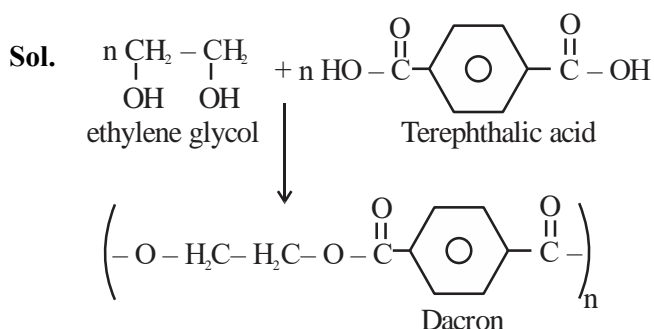


17. Given below are two statements : one is labelled as **Assertion A** and the other is labelled as **Reason R**.
- Assertion A:** Dacron is an example of polyester polymer.
- Reason R:** Dacron is made up of ethylene glycol and terephthalic acid monomers.
- In the light of the above statements, choose the **most appropriate** answer from the options given below.

- (A) Both **A** and **B** are correct and **R** is the correct explanation of **A**.
- (B) Both **A** and **B** are correct but **R** is NOT the correct explanation of **A**.
- (C) **A** is correct but **R** is not correct.
- (D) **A** is not correct but **R** is correct.

Official Ans. by NTA (A)

Allen Ans. (A)



18. The structure of protein that is unaffected by heating is :

- (A) secondary structure (B) tertiary structure
(C) primary structure (D) quaternary structure

Official Ans. by NTA (C)

Allen Ans. (C)

Sol. Primary structure of protein is unaffected by physical 'or' chemical changes.

19. The mixture of chloroxylenol and terpineol is an example of :

- (A) antiseptic (B) pesticide
(C) disinfectant (D) narcotic analgesic

Official Ans. by NTA (A)

Allen Ans. (A)

Sol. Antiseptic Dettol is mixture of chloroxylenol and terpineol.

20. A white precipitate was formed when BaCl_2 was added to water extract of an inorganic salt. Further, a gas 'X' with characteristic odour was released when the formed white precipitate was dissolved in dilute HCl. The anion present in the inorganic salt is :

- (A) I^- (B) SO_3^{2-}
(C) S^{2-} (D) NO_2^-

Official Ans. by NTA (B)

Allen Ans. (B)

Sol. $\text{BaCl}_2 + \text{SO}_3^{2-} \rightarrow \text{BaSO}_3 \downarrow \xrightarrow{\text{dil. HCl}} \text{SO}_2 \uparrow$
white burning sulphur like smell

SECTION-B

1. A box contains 0.90 g of liquid water in equilibrium with water vapour at 27°C . The equilibrium vapour pressure of water at 27°C 32.0 Torr. When the volume of the box is increased, some of the liquid water evaporates to maintain the equilibrium pressure. If all the liquid water evaporates, then the volume of the box must be ____ litre. [nearest integer]

(Given: $R = 0.082 \text{ L atm K}^{-1} \text{ mol}^{-1}$)

(Ignore the volume of the liquid water and assume water vapours behave as an ideal gas.)

Official Ans. by NTA (29)

Allen Ans. (29)

Sol. $V = \frac{nRT}{P} = \frac{0.90 \times 0.82 \times 300 \times 760}{18 \times 32} = 29.21$

2. 2.2 g of nitrous oxide (N_2O) gas is cooled at a constant pressure of 1 atm from 310 K to 270 K causing the compression of the gas from 217.1 mL to 167.75 mL. The change in internal energy of the process, ΔU is '-x' J. The value of 'x' is ____.

[nearest integer]

(Given: atomic mass of N = 14 g mol^{-1} and of O = 16 g mol^{-1} .)

Molar heat capacity of N_2O is $100 \text{ JK}^{-1} \text{ mol}^{-1}$)

Official Ans. by NTA (195)

Allen Ans. (195)

Sol. N_2O moles = $\frac{2.2}{44} = \frac{1}{20}$

$$\Delta H = nC_p \Delta T = \frac{1}{20} \times 100(-40) = -200\text{J}$$

$$\Delta U = q_p + w$$

$$w = -P_{\text{ext.}} \Delta V$$

$$W = -1 \frac{(167.75 - 217.1)}{1000} \times 101.3\text{J}$$

$$w = +5\text{J}$$

$$\Delta U = -200 + 5 = -195\text{J}$$

3. Elevation in boiling point for 1.5 molal solution of glucose in water is $4K$. The depression in freezing point for 4.5 molal solution of glucose in water is $4K$. The ratio of molal elevation constant to molal depression constant (K_b/K_f) is _____.

Official Ans. by NTA (3)

Allen Ans. (3)

Sol. $\Delta T_b = iK_b m$

$$\Delta T_f = iK_f m$$

$$\frac{4}{4} = \frac{K_b \cdot 1.5}{K_f \cdot 4.5}$$

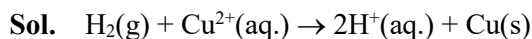
$$\frac{K_b}{K_f} = 3$$

4. The cell potential for the given cell at 298 K
 $\text{Pt} | \text{H}_2(\text{g}, 1 \text{ bar}) | \text{H}^+(\text{aq}) || \text{Cu}^{2+}(\text{aq}) | \text{Cu}(\text{s})$
 is 0.31 V. The pH of the acidic solution is found to be 3, whereas the concentration of Cu^{2+} is 10^{-x} M . The value of x is _____.

(Given: $E^\ominus_{\text{Cu}^{2+}/\text{Cu}} = 0.34 \text{ V}$ and $\frac{2.303RT}{F} = 0.06 \text{ V}$)

Official Ans. by NTA (7)

Allen Ans. (7)



$$0.31 = 0.34 - \frac{0.06}{2} \log \frac{[\text{H}^+]^2}{[\text{Cu}^{2+}]}$$

$$[\text{Cu}^{2+}] = 10^{-7} \text{ M}$$

$$x = 7$$

5. The equation

$$k = (6.5 \times 10^{12} \text{ s}^{-1}) e^{-26000\text{K}/T}$$

is followed for the decomposition of compound A. The activation energy for the reaction is _____ kJ mol^{-1} . [nearest integer]

(Given: $R = 8.314 \text{ J K}^{-1} \text{ mol}^{-1}$)

Official Ans. by NTA (216)

Allen Ans. (216)

Sol. $K = Ae^{-E_a/RT} = (6.5 \times 10^{12} \text{ s}^{-1}) e^{-26000\text{K}/T}$

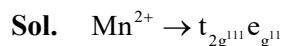
$$\frac{E_a}{8.314} = 26000$$

$$E_a = 216.164 \text{ kJ/mol.}$$

6. Spin only magnetic moment of $[\text{MnBr}_6]^{4-}$ is _____ B.M. (round off to the closest integer)

Official Ans. by NTA (6)

Allen Ans. (6)

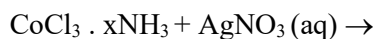


$$\mu_s = \sqrt{35}$$

$$= 5.91$$

$$= 6$$

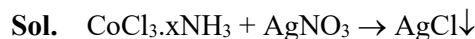
7. For the reaction given below:



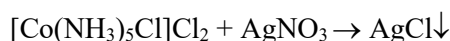
If two equivalents of AgCl precipitate out, then the value of x will be _____.

Official Ans. by NTA (5)

Allen Ans. (5)



$$2 \text{ mol}$$



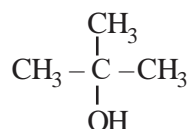
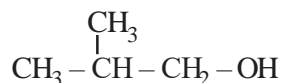
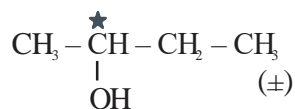
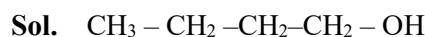
$$2 \text{ mol}$$

$$x = 5$$

8. The number of chiral alcohol(s) with molecular formula $\text{C}_4\text{H}_{10}\text{O}$ is _____.

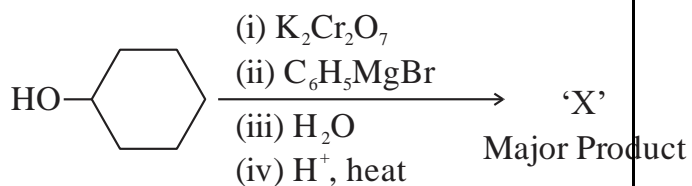
Official Ans. by NTA (1)

Allen Ans. (2)



Out of which only two are chiral

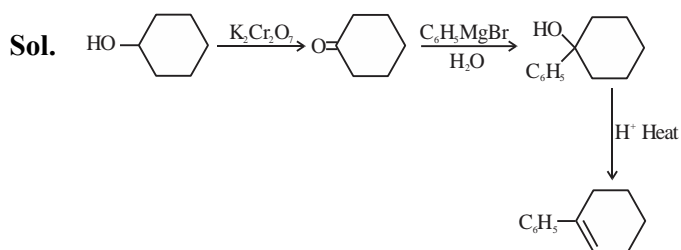
9. In the given reaction



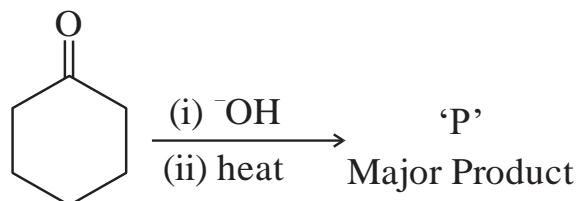
the number of sp^2 hybridised carbon (s) in compound 'X' is ____.

Official Ans. by NTA (8)

Allen Ans. (8)



10. In the given reaction,



The number of π electrons present in the product 'P' is ____.

Official Ans. by NTA (4s)

Allen Ans. (4)

Sol.

