



JEE-MAIN – JUNE, 2022

(Held On Tuesday 27th June, 2022)

TIME : 9 : 00 AM to 12 : 00 PM

PHYSICS

Test Pattern : JEE-MAIN

Maximum Marks : 120

Topic Covered: FULL SYLLABUS

Important instruction:

1. Use Blue / Black Ball point pen only.
2. There are three sections of equal weightage in the question paper **Physics, Chemistry** and **Mathematics** having 30 questions in each subject. Each paper have 2 sections A and B.
3. You are awarded +4 marks for each correct answer and –1 marks for each incorrect answer.
4. Use of calculator and other electronic devices is not allowed during the exam.
5. No extra sheets will be provided for any kind of work.

Name of the Candidate (in Capitals) _____

Father's Name (in Capitals) _____

Form Number : in figures _____

: in words _____

Centre of Examination (in Capitals): _____

Candidate's Signature: _____ Invigilator's Signature : _____

Rough Space

YOUR TARGET IS TO SECURE GOOD RANK IN JEE-MAIN

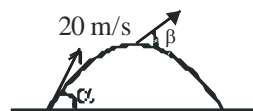
Corporate Office : **ALLEN** Digital Pvt. Ltd., "SRAJIT", IPIA, ROAD NO.1, Kota (Rajasthan) INDIA-324005

+91-9513736499 | +91-7849901001 | wecare@allendigital.in | www.allendigital.in

FINAL JEE-MAIN EXAMINATION – JUNE, 2022**(Held On Monday 27th June, 2022)****TIME : 9:00 AM to 12:00 PM****PHYSICS****TEST PAPER WITH SOLUTION****SECTION-A**

1. A projectile is launched at an angle ' α ' with the horizontal with a velocity 20 ms^{-1} . After 10 s, its inclination with horizontal is ' β '. The value of $\tan\beta$ will be : ($g = 10 \text{ ms}^{-2}$)

- (A) $\tan \alpha + 5 \sec \alpha$ (B) $\tan \alpha - 5 \sec \alpha$
(C) $2 \tan \alpha - 5 \sec \alpha$ (D) $2 \tan \alpha + 5 \sec \alpha$

Official Ans. by NTA (B)**Allen Ans. (B)****Sol.**

$$v_x = u_x = 20 \cos \alpha$$

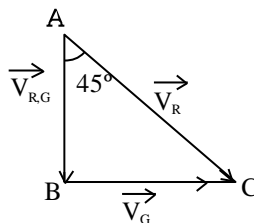
$$v_y = 20 \sin \alpha - 10 \times 10$$

$$\tan \beta = \frac{v_y}{v_x} = \frac{20 \sin \alpha - 100}{20 \cos \alpha}$$

$$= \tan \alpha - 5 \sec \alpha$$

2. A girl standing on road holds her umbrella at 45° with the vertical to keep the rain away. If she starts running without umbrella with a speed of $15\sqrt{2} \text{ kmh}^{-1}$, the rain drops hit her head vertically. The speed of rain drops with respect to the moving girl is :

- (A) 30 kmh^{-1} (B) $\frac{25}{\sqrt{2}} \text{ kmh}^{-1}$
(C) $\frac{30}{\sqrt{2}} \text{ kmh}^{-1}$ (D) 25 kmh^{-1}

Official Ans. by NTA (C)**Allen Ans. (C)****Sol.**

$$V = \tan \theta = \frac{V_G}{V_{RG}}$$

$$1 = \frac{V_G}{V_{RG}} \Rightarrow 15\sqrt{2} = V_{RG}$$

3. A silver wire has mass $(0.6 \pm 0.006) \text{ g}$, radius $(0.5 \pm 0.005) \text{ mm}$ and length $(4 \pm 0.04) \text{ cm}$. The maximum percentage error in the measurement of its density will be :

- (A) 4% (B) 3%
(C) 6% (D) 7%

Official Ans. by NTA (A)**Allen Ans. (A)**

$$\text{Sol. } M = (0.6 \pm 0.006) \text{ g}$$

$$r = (0.5 \pm 0.005) \text{ mm}$$

$$l = (4 \pm 0.04) \text{ cm}$$

$$\rho = \frac{m}{V}$$

$$\Rightarrow \frac{\Delta \rho}{\rho} = \frac{\Delta m}{m} + \frac{2\Delta r}{r} + \frac{\Delta l}{l}$$

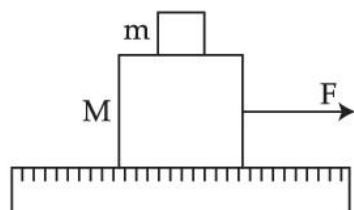
$$(\text{Volume of cylinder} = \pi r^2 l)$$

$$= \frac{0.006}{0.6} + \frac{2 \times 0.005}{0.5} + \frac{0.04}{4}$$

$$100 \times \frac{\Delta \rho}{\rho} = 4 \times 10^{-2} \times 100$$

$$\frac{\Delta \rho}{\rho} \times 100 = 4\%$$

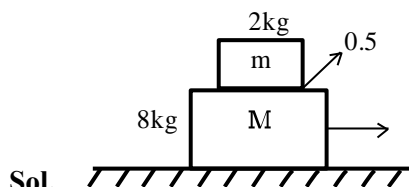
4. A system of two blocks of masses $m = 2 \text{ kg}$ and $M = 8 \text{ kg}$ is placed on a smooth table as shown in figure. The coefficient of static friction between two blocks is 0.5. The maximum horizontal force F that can be applied to the block of mass M so that the blocks move together will be :



- (A) 9.8 N (B) 39.2 N
(C) 49 N (D) 78.4 N

Official Ans. by NTA (C)

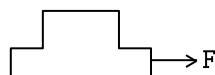
Allen Ans. (C)



Sol.

$$(a_A)_{\max} = 0.5g = 4.9 \text{ m/s}^2$$

For moving together



$$\begin{aligned} F_{\max} &= m_T a_A \\ &= 10 \times 4.9 \\ &= 49 \text{ N} \end{aligned}$$

5. Two blocks of masses 10 kg and 30 kg are placed on the same straight line with coordinates (0, 0) cm and (x, 0) cm respectively. The block of 10 kg is moved on the same line through a distance of 6 cm towards the other block. The distance through which the block of 30 kg must be moved to keep the position of centre of mass of the system unchanged is :

- (A) 4 cm towards the 10 kg block
(B) 2 cm away from the 10 kg block
(C) 2 cm towards the 10 kg block
(D) 4 cm away from the 10 kg block

Official Ans. by NTA (C)

Allen Ans. (C)

Sol.
$$\Delta x_G = \frac{m_1 \Delta x_1 + m_2 \Delta x_2}{m_1 + m_2}$$

$$0 = \frac{10 \times 6 + 30(\Delta x_2)}{40}$$

$$\Delta x_2 = -2 \text{ cm}$$

Block of mass 30 kg will move towards 10 kg.

6. A 72Ω galvanometer is shunted by a resistance of 8Ω . The percentage of the total current which passes through the galvanometer is :

- (A) 0.1% (B) 10 %
(C) 25% (D) 0.25%

Official Ans. by NTA (B)

Allen Ans. (B)

Sol.
$$S = \frac{R_G}{\frac{I}{I_g} - 1}$$

$$8 = \frac{72}{\frac{I}{I_g} - 1}$$

$$\frac{I}{I_g} - 1 = 9$$

$$\frac{I}{I_g} = 10 \Rightarrow \frac{I_g}{I} = \frac{1}{10} \quad \% I = \frac{I_g}{I} \times 100 = 10\%$$

7. Given below are two statements :

Statement I : The law of gravitation holds good for any pair of bodies in the universe.

Statement II : The weight of any person becomes zero when the person is at the centre of the earth.

In the light of the above statements, choose the correct answer from the options given below.

- (A) Both statement I and Statement II are true
(B) Both statement I and Statement II are false
(C) Statement I is true but Statement II are false
(D) Statement I is false but Statement II is true

Official Ans. by NTA (A)

Allen Ans. (A)

- Sol.** Since it is universal law so it hold good for any pair of bodies.

The value of g at centre is zero.

So statement I and Statement II are true.

8. What percentage of kinetic energy of a moving particle is transferred to a stationary particle when it strikes the stationary particle of 5 times its mass? (Assume the collision to be head-on elastic collision)

(A) 50.0% (B) 66.6%
(C) 55.5% (D) 33.3%

Official Ans. by NTA (C)

Allen Ans. (C)

Sol. Velocity after collision

$$V_2 = \frac{(m_2 - m_1)u_2 + 2m_1u_1}{m_1 + m_2}$$

$$V_2 = \frac{(5m - m)0 + 2m.u_0}{m + 5m} = \frac{u_0}{3}$$

$$\% \Delta KE = \frac{\frac{1}{2}5m\left(\frac{u_0}{3}\right)^2 - 0}{\frac{1}{2}mu_0^2} \times 100$$

$$= \frac{5u_0^2}{9u_0^2} \times 100 = \frac{500}{9} = 55.6\%$$

9. The velocity of a small ball of mass 'm' and density d_1 , when dropped in a container filled with glycerine, becomes constant after some time. If the density of glycerine is d_2 , then the viscous force acting on the ball, will be :

(A) $mg\left(1 - \frac{d_1}{d_2}\right)$ (B) $mg\left(1 - \frac{d_2}{d_1}\right)$
(C) $mg\left(\frac{d_1}{d_2} - 1\right)$ (D) $mg\left(\frac{d_2}{d_1} - 1\right)$

Official Ans. by NTA (B)

Allen Ans. (B)

$$F_V = mg - F_B$$

Sol. $= mg - \left(\frac{m}{d_1} \times d_2\right)g$
 $= mg\left(1 - \frac{d_2}{d_1}\right)$

10. The susceptibility of a paramagnetic material is 99. The permeability of the material in Wb/A-m is : [Permeability of free space $\mu_0 = 4\pi \times 10^{-7} \text{ Wb/A-m}$]

(A) $4\pi \times 10^{-7}$ (B) $4\pi \times 10^{-4}$
(C) $4\pi \times 10^{-5}$ (D) $4\pi \times 10^{-6}$

Official Ans. by NTA (C)

Allen Ans. (C)

Sol. Susceptibility $\chi = 99$

$$\mu_r = \frac{\mu}{\mu_0} = 1 + \chi$$

$$\mu = \mu_0(1 + \chi)$$

$$= 4\pi \times 10^{-7} [1 + 99]$$

$$= 4\pi \times 10^{-5}$$

11. The current flowing through an ac circuit is given by

$$I = 5 \sin(120\pi t) \text{ A}$$

How long will the current take to reach the peak value starting from zero?

(A) $\frac{1}{60} \text{ s}$ (B) 60s
(C) $\frac{1}{120} \text{ s}$ (D) $\frac{1}{240} \text{ s}$

Official Ans. by NTA (D)

Allen Ans. (D)

Sol. $\omega = 120\pi = \frac{2\pi}{T} \Rightarrow T = \frac{1}{60} \text{ sec}$

$$\text{time taken to reach peak value} = \frac{T}{4} = \frac{1}{240} \text{ s}$$

12. Match List-I with List - II :

List - I

List - II

	List-I		List-II
(a)	Ultraviolet rays	(i)	Study crystal structure
(b)	Microwaves	(ii)	Greenhouse effect
(c)	Infrared waves	(iii)	Sterilizing surgical instrument
(d)	X-rays	(iv)	Radar system

Choose the correct answer from the options given below :

(A) (a) - (iii), (b) - (iv), (c) - (ii), (d) - (i)
(B) (a) - (iii), (b) - (i), (c) - (ii), (d) - (iv)
(C) (a) - (iv), (b) - (iii), (c) - (ii), (d) - (i)
(D) (a) - (iii), (b) - (iv), (c) - (i), (d) - (ii)

Official Ans. by NTA (A)

Allen Ans. (A)

Sol. (Fact)

13. An α particle and a carbon 12 atom has same kinetic energy K . The ratio of their de-Broglie wavelength ($\lambda_\alpha : \lambda_{C12}$) is :

(A) $1 : \sqrt{3}$ (B) $\sqrt{3} : 1$
(C) $3 : 1$ (D) $2 : \sqrt{3}$

Official Ans. by NTA (B)

Allen Ans. (B)

Sol. $k = \frac{P^2}{2m} \Rightarrow P \propto \sqrt{m}$

Now $\lambda = \frac{h}{p}$

So, $\lambda \propto \frac{1}{p} \Rightarrow \lambda \propto \frac{1}{\sqrt{m}}$

$\frac{\lambda_\alpha}{\lambda_{C12}} = \frac{\sqrt{3}}{1}$

14. A force of 10N acts on a charged particle placed between two plates of a charged capacitor. If one plate of capacitor is removed, then the force acting on that particle will be :

(A) 5 N (B) 10 N
(C) 20 N (D) Zero

Official Ans. by NTA (A)

Allen Ans. (A)

Sol.
$$\begin{array}{|c|c|} \hline Q & -Q \\ \hline + & - \\ + & E \\ + & \bullet \\ + & - \\ + & - \\ \hline \end{array}$$

$F = qE = q \left(\frac{Q}{A \epsilon_0} \right) = \frac{qQ}{A \epsilon_0} = 10N$

Now, when one plate is removed.

$$\begin{array}{|c|c|} \hline \frac{Q}{2} & \frac{Q}{2} \\ \hline + & + \\ + & + \\ + & + \\ + & + \\ \hline \end{array} \quad E, q$$

$E' = \frac{Q}{2A \epsilon_0}$

$F = qE' = \frac{Qq}{2A \epsilon_0} = 5N$

15. The displacement of simple harmonic oscillator after 3 seconds starting from its mean position is equal to half of its amplitude. The time period of harmonic motion is :

(A) 6 s (B) 8 s
(C) 12s (D) 36 s

Official Ans. by NTA (D)

Allen Ans. (D)

Sol. $X = A \sin \omega t \left(t = 3, X = \frac{A}{2} \right)$

$\Rightarrow \frac{A}{2} = A \sin 3\omega$

$\Rightarrow \sin 3\omega = \frac{1}{2}$

$\Rightarrow 3\omega = \frac{\pi}{6}$

$\Rightarrow \omega = \frac{\pi}{18} = \frac{2\pi}{T}$

$\Rightarrow T = 36s$

16. An observer moves towards a stationary source of sound with a velocity equal to one-fifth of the velocity of sound. The percentage change in the frequency will be :

(A) 20% (B) 10%
(C) 5% (D) 0%

Official Ans. by NTA (A)

Allen Ans. (A)

Sol. $f_0 = \left(\frac{v + v_0}{v} \right) f_s$

$f_0 = \left(\frac{v + \frac{v}{5}}{v} \right) f_s$

$f_0 = \frac{6}{5} f_s$

% change = $\frac{f_0 - f_s}{f_s} \times 100$

$= \frac{1}{5} \times 100 = 20\%$

17. Consider a light ray travelling in air is incident into a medium of refractive index $\sqrt{2n}$. The incident angle is twice that of refracting angle. Then, the angle of incidence will be :

- (A) $\sin^{-1}(\sqrt{n})$ (B) $\cos^{-1}\left(\sqrt{\frac{n}{2}}\right)$
 (C) $\sin^{-1}(\sqrt{2n})$ (D) $2\cos^{-1}\left(\sqrt{\frac{n}{2}}\right)$

Official Ans. by NTA (D)

Allen Ans. (D)

$$i = 2r$$

$$\sin i \times n_1 = \sin r \times n_2$$

Sol. $\sin i \times 1 = \sin \frac{i}{2} \times \sqrt{2n}$

$$\frac{\sin i}{\sin \frac{i}{2}} = \sqrt{2n}$$

$$\frac{2 \sin \frac{i}{2} \cos \frac{i}{2}}{\sin \frac{i}{2}} = \sqrt{2n}$$

$$\cos \frac{i}{2} = \sqrt{\frac{n}{2}}$$

$$\frac{i}{2} = \cos^{-1}\left(\sqrt{\frac{n}{2}}\right)$$

$$i = 2\cos^{-1}\left(\sqrt{\frac{n}{2}}\right)$$

18. A hydrogen atom in its ground state absorbs 10.2 eV of energy. The angular momentum of electron of the hydrogen atom will increase by the value of : (Given, Planck's constant = 6.6×10^{-34} Js)

- (A) 2.10×10^{-34} Js (B) 1.05×10^{-34} Js
 (C) 3.15×10^{-34} Js (D) 4.2×10^{-34} Js

Official Ans. by NTA (B)

Allen Ans. (B)

Sol. $13.6\left(\frac{1}{1^2} - \frac{1}{n^2}\right) = 10.2$

$$n = 2$$

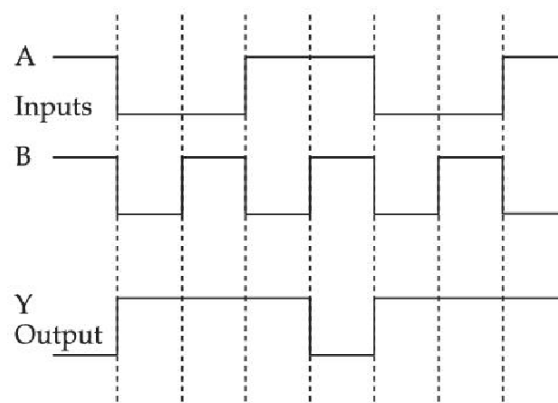
$$L_i = \frac{h}{2\pi} \times 1$$

$$L_F = \frac{2h}{2\pi}$$

$$\Delta L = L_F - L_i = \frac{h}{2\pi} = \frac{6.6 \times 10^{-34}}{2 \times \frac{22}{7}}$$

$$= 1.05 \times 10^{-34} \text{ J-s}$$

19. Identify the correct Logic Gate for the following output (Y) of two inputs A and B.



- (A)
- (B)
- (C)
- (D)

Official Ans. by NTA (B)

Allen Ans. (B)

Sol.

A	B	Y
1	1	0
0	0	1
0	1	1
1	0	1
1	1	0
0	0	1
0	1	1
1	0	1
NAND Gate		

$$Y = \overline{A.B}$$

20. A mixture of hydrogen and oxygen has volume 2000 cm^3 , temperature 300 K , pressure 100 kPa and mass 0.76 g . The ratio of number of moles of hydrogen to number of moles of oxygen in the mixture will be :

- (A) $\frac{1}{3}$ (B) $\frac{3}{1}$
(C) $\frac{1}{16}$ (D) $\frac{16}{1}$

Official Ans. by NTA (B)

Allen Ans. (B)

Sol. $PV = nRT$

$$n = \frac{100 \times 10^3 \times 2000 \times 10^{-6}}{\frac{25}{3} \times 300}$$

$$n = 80 \times 10^{-3}$$

$$n_1 + n_2 = 0.08$$

$$n_1 \times 2 + n_2 \times 32 = 0.76$$

$$(0.08 - n_2) \times 2 + n_2 (32) = 0.76$$

$$n_2 = 0.02$$

$$n_1 = 0.06$$

$$\frac{n_1}{n_2} = \frac{3}{1}$$

SECTION-B

1. In a carnot engine, the temperature of reservoir is 527°C and that of sink is 200 K . If the workdone by the engine when it transfers heat from reservoir to sink is 12000 kJ , the quantity of heat absorbed by the engine from reservoir is _____ $\times 10^6 \text{ J}$.

Official Ans. by NTA (16)

Allen Ans. (16)

Sol. $(T_2)T_{\text{sink}} = 200\text{K}$

$$(T_1)T_{\text{Reservoir}} = 527 + 273 = 800\text{K}$$

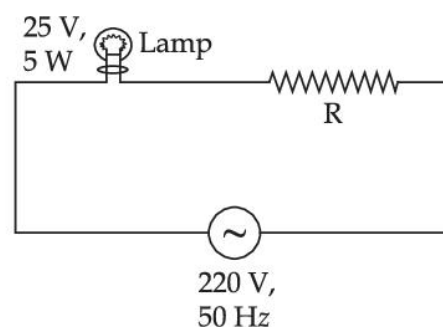
$$W = 12000\text{KJ} = 12 \times 10^6 \text{ J}$$

$$Q_1 = ?$$

$$\eta = 1 - \frac{T_2}{T_1} = \frac{W}{Q_1} = 1 - \frac{200}{800} = \frac{12 \times 10^6}{Q_1}$$

$$\frac{3}{4} = \frac{12 \times 10^6}{Q_1} = Q_1 = 16 \times 10^6 \text{ J}$$

2. A 220 V , 50 Hz AC source is connected to a 25 V , 5 W lamp and an additional resistance R in series (as shown in figure) to run the lamp at its peak brightness, then the value of R (in ohm) will be _____.



Official Ans. by NTA (975)

Allen Ans. (975)

Sol. $P = Vi$
 $5 = 25i$

$$i = \frac{1}{5}$$

$$V_R = iR$$

$$(220 - 25) = \frac{1}{5} R$$

$$R = 195 \times 5 = 975\Omega$$

3. In Young's double slit experiment the two slits are 0.6 mm distance apart. Interference pattern is observed on a screen at a distance 80 cm from the slits. The first dark fringe is observed on the screen directly opposite to one of the slits. The wavelength of light will be _____ nm.

Official Ans. by NTA (450)

Allen Ans. (450)

Sol. $d = 0.6 \times 10^{-3}$
 $D = 80 \times 10^{-2}$

$$\text{1st Dark fringe} = \frac{D\lambda}{2d} = \frac{d}{2}, \quad \lambda = \frac{d^2}{D}$$

$$= 450 \times 10^{-9} \text{ m}$$

4. A beam of monochromatic light is used to excite the electron in Li^{++} from the first orbit to the third orbit. The wavelength of monochromatic light is found to be $x \times 10^{-10} \text{ m}$. The value of x is _____.
[Given $hc = 1242 \text{ eV nm}$]

Official Ans. by NTA (114)

Allen Ans. (114)

Sol. $Z = 3$

$$\frac{1}{\lambda} = RZ^2 \left(\frac{1}{n_1^2} - \frac{1}{n_2^2} \right)$$

$$n_1 = 1, \quad n_2 = 3,$$

$$\frac{1}{\lambda} = R(9) \left(\frac{1}{1} - \frac{1}{9} \right) = 8R$$

$$\lambda = \frac{1}{8R} = 114 \times 10^{-10} \text{ m}$$

5. A cell, shunted by a 8Ω resistance, is balanced across a potentiometer wire of length 3m. The balancing length is 2 m when the cell is shunted by 4Ω resistance. The value of internal resistance of the cell will be _____ Ω .

Official Ans. by NTA (8)

Allen Ans. (8)

Sol. $\frac{V_1}{V_2} = \frac{3}{2} = \frac{E - i_1 r}{E - i_2 r}$

$$= \frac{E - \frac{E}{8+r} \times r}{E - \frac{E}{4+r} \times r}$$

$$\frac{3}{2} = \frac{8(4+r)}{4(8+r)}$$

$$24 + 3r = 16 + 4r$$

$$r = 8 \Omega$$

6. The current density in a cylindrical wire of radius 4 mm is $4 \times 10^6 \text{ Am}^{-2}$. The current through the outer portion of the wire between radial distance $\frac{R}{2}$ and

R is _____ $\pi \text{ A}$.

Official Ans. by NTA (48)

Allen Ans. (48)

Sol. $J = \frac{I}{A}$

$$I = JA$$

$$= 4 \times 10^6 \times \left[\pi R^2 - \pi \left(\frac{R}{2} \right)^2 \right]$$

$$= 4 \times 10^6 \times \pi R^2 \times \frac{3}{4}$$

$$= 4 \times 10^6 \times \pi \times (4 \times 10^{-3})^2 \times \frac{3}{4} = 48\pi \text{ A}.$$

7. A capacitor of capacitance 50 pF is charged by 100 V source. It is then connected to another uncharged identical capacitor. Electrostatic energy loss in the process is _____ nJ.

Official Ans. by NTA (125)

Allen Ans. (125)

Sol. Energy loss = $\frac{1}{2} \frac{C_1 C_2}{C_1 + C_2} (V_1 - V_2)^2$

$$= \frac{1}{2} \frac{50 \times 50 \times 10^{-12} \times 10^{-12}}{(50 + 50) 10^{-12}} (100 - 0)^2 = 125 \text{ nJ}$$

8. The height of a transmitting antenna at the top of a tower is 25 m and that of receiving antenna is, 49 m. The maximum distance between them, for satisfactory communication in LOS (Line-Of-Sight) is $K\sqrt{5} \times 10^2 \text{ m}$. The value of K is _____.
[Assume radius of Earth is $64 \times 10^5 \text{ m}$] (Calculate upto nearest integer value)

Official Ans. by NTA (192)

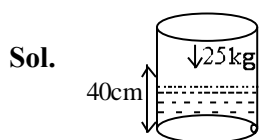
Allen Ans. (192)

Sol. $LOS = \sqrt{2Rh_T} + \sqrt{2Rh_R}$
 $= \sqrt{2R}(\sqrt{h_T} + \sqrt{h_R})$
 $= \sqrt{2 \times 64 \times 10^5}(\sqrt{25} + \sqrt{49})$
 $= 192\sqrt{5} \times 10^2 \text{ m}.$
 $K = 192$

9. The area of cross-section of a large tank is 0.5 m^2 . It has a narrow opening near the bottom having area of cross-section 1 cm^2 . A load of 25 kg is applied on the water at the top in the tank. Neglecting the speed of water in the tank, the velocity of the water, coming out of the opening at the time when the height of water level in the tank is 40 cm above the bottom, will be _____ cm s^{-1} .
[Take $g = 10 \text{ ms}^{-2}$]

Official Ans. by NTA (300)

Allen Ans. (300)



$$P_0 + \frac{250}{0.5} + \rho g(40 \times 10^{-2}) = P_0 + \frac{1}{2} \rho v^2$$

$$500 + \frac{1000 \times 10 \times 40}{100} = \frac{1}{2} \times 1000 \times v^2$$

$$V = 3 \text{ m/s}$$

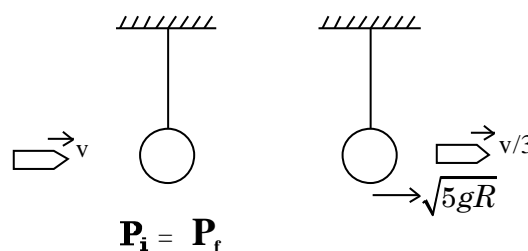
$$V = 300 \text{ cm/s}$$

10. A pendulum of length 2 m consists of a wooden bob of mass 50 g. A bullet of mass 75 g is fired towards the stationary bob with a speed v . The bullet emerges out of the bob with a speed $\frac{v}{3}$ and the bob just completes the vertical circle. The value of v is _____ ms^{-1} . (if $g = 10 \text{ m/s}^2$)

Official Ans. by NTA (10)

Allen Ans. (10)

Sol. Considering Only Horizontal direction



$$(75v) + 0 = 50(\sqrt{5gR}) + 75\frac{v}{3}$$

$$75\left(v - \frac{v}{3}\right) = 50\sqrt{100}$$

$$v = 10 \text{ m/s}$$